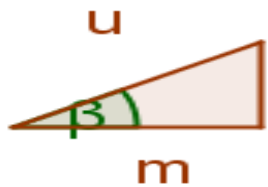


$$\tan \alpha = \frac{h}{x}$$

$$h = x \cdot \tan \alpha$$

$$x = \frac{h}{\tan \alpha}$$



$$\cos \beta = \frac{m}{u}$$

$$m = u \cdot \cos \beta$$

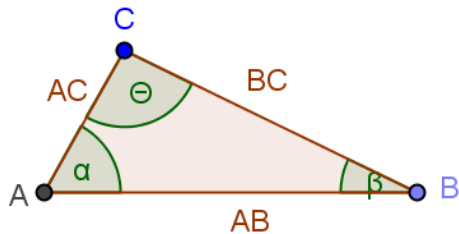
$$u = \frac{m}{\cos \beta}$$



$$\sin \alpha = \frac{h}{X}$$

$$h = X \cdot \sin \alpha$$

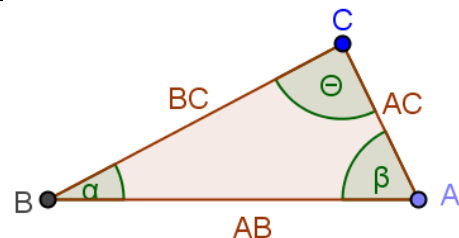
$$X = \frac{h}{\sin \alpha}$$



$$\sin \alpha = \frac{BC}{AB}$$

$$\cos \alpha = \frac{AC}{AB}$$

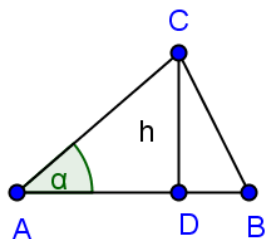
$$\tan \alpha = \frac{BC}{AC}$$



$$\sin \alpha = \frac{AC}{AB}$$

$$\sin \beta = \frac{BC}{AB}$$

$$\tan \beta = \frac{BC}{AC}$$



$$\sin \alpha = \frac{h}{AC}$$

$$\cos \alpha = \frac{AD}{AC}$$

$$\tan \alpha = \frac{h}{AD}$$